

Some vector equality and application to the solution of geometric problems

Saipnazarov Shaylozbek Aktamovich

Candidate of Pedagogical Sciences, Tashkent University of economics

Saidova Munirajon Yuldashevna

Tashkent University of economics

Yuldashevna.m96@gmail.com

Djumanazarova Zamira Kojabayevna

Tashkent University of economics

zamira.kojaboevna17@gmail.com

Abstract. This article discusses three basic relationships and shows them when applied to solving geometric problems. However, teaching students how to use vectors to solve problems in a limited curriculum is difficult. To overcome these difficulties, you need a well-thought-out exercise system. The proposed article describes the experience in solving this issue.

Key words. Collinear, noncollinear, coplanar, centroid, tetrahedron.

Introduction

The apparatus of vector algebra, studied in the course of mathematics, is widely used in proving theorems and solving many geometric problems. However, teaching students how to use vectors to solve problems in a limited curriculum is difficult. To overcome these difficulties, you need a well-thought-out exercise system.

Let us now proceed to consider the basic vector relations and their application to solving problems.

1-basic ratio. Any triangle ABC satisfies the equality

$$\overrightarrow{MA} + \overrightarrow{MB} + \overrightarrow{MC} = \overrightarrow{0},$$

Where M is the centroid of triangle ABC . Let us prove the relation 1. Let M be the centroid of triangle ABC (fig.1). Let's connect point M with all the vertices of the triangle. Line MB intersects AC of triangle ABC at point D , which is the midpoint of side AC .

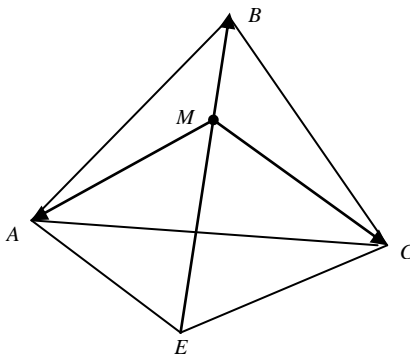


fig. 1.

Task 1.

The intersection points of the medians of triangles ABC and $A_1B_1C_1$ coincide. Prove that vectors AA_1 , BB_1 and CC_1 are coplanar.

Solution. Based on 1 we have:

$$\overline{MA} + \overline{MB} + \overline{MC} = \overline{0} \quad (1)$$

$$\overline{MA_1} + \overline{MB_1} + \overline{MC_1} = \overline{0} \quad (2)$$

Subtracting parts from (1) and (2), we get:

$$\overline{AA_1} + \overline{BB_1} + \overline{CC_1} = \overline{0} \quad (3)$$

Equality (3) means that vectors AA_1, BB_1 and CC_1 are coplanar.

Task 2. Prove that if M is the centroid of triangle ABC and O is an arbitrary point in space, then the equality

$$\overline{OM} = \frac{1}{3}(\overline{OA} + \overline{OB} + \overline{OC}) \quad (4)$$

Evidence. We write the following vector equalities:

$$\overline{OM} + \overline{MA} = \overline{OA},$$

$$\overline{OM} + \overline{MB} = \overline{OB},$$

$$\overline{OM} + \overline{MC} = \overline{OC}.$$

Adding these equalities by parts, we get:

$$3\overline{OM} + (\overline{MA} + \overline{MB} + \overline{MC}) = \overline{OA} + \overline{OB} + \overline{OC},$$

from where

$$\overline{OM} = \frac{1}{3}(\overline{OA} + \overline{OB} + \overline{OC})$$

2-basic ratio. Point D is taken in triangle ABC on side AC so that $AD;DC = m:n$. Then the following relation holds: (fig.2)

$$\overline{BD} = \frac{n}{m+n} \overline{BA} + \frac{m}{m+n} \overline{BC} \quad (5)$$

Evidence. From triangle ABC we have:

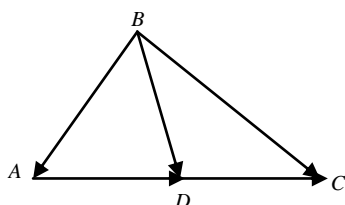


fig. 2

$$\overline{AC} = \overline{BC} - \overline{BA},$$

$$\overline{AD} = \frac{m}{m+n} \overline{AC} = \frac{m}{m+n} \overline{BC} - \frac{m}{m+n} \overline{BA},$$

$$\overline{BD} = \overline{BA} + \overline{AD} = \overline{BA} + \frac{m}{m+n} \overline{BC} - \frac{m}{m+n} \overline{BA} =$$

$$= \frac{n}{n+m} \overline{BA} + \frac{m}{m+n} \overline{BC}$$

Let us show further the application of (5) to the solution of problems.

Task 2. A line AE is drawn through the middle E of the median CC_1 of triangle ABC , intersecting side BC at point F (fig. 3). Calculate $AE;EF$ and $CF:FB$.

Solution. Introduce vectors $\overline{AB} = \overline{b}$ and $\overline{AC} = \overline{c}$. Let $CF:FB = m:n$. The by formula (5) we have:

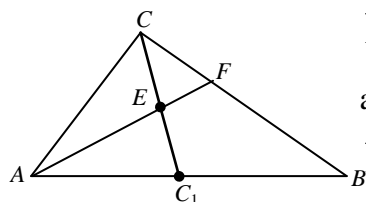


fig. 3

$$\overline{AF} = \frac{m}{m+n} \overline{b} + \frac{n}{m+n} \overline{c}$$

and

$$\overline{AF} = x \cdot \overline{AF} = \frac{xm}{m+n} \overline{b} + \frac{xn}{m+n} \overline{c} \quad (6)$$

where $0 < x < 1$.

On the other hand, given that E is the midpoint of the median CC_1 , we obtain the following expression for AE :

$$\overline{AE} = \frac{1}{2} \overline{AC} + \frac{1}{2} \overline{AC_1} = \frac{1}{2} \overline{c} + \frac{1}{4} \overline{b} \quad (7)$$

Due to the uniqueness of the expansion of the vector in two no collinear vectors from (6) and (7), we obtain the system

$$\begin{cases} \frac{xm}{m+n} = \frac{1}{4}, \\ \frac{xn}{m+n} = \frac{1}{2} \end{cases} \quad (8)$$

Dividing by parts the first equation of system (8) by the second, we obtain that $m:n=1:2$, i.e.

$CF:FB=1:2$. Adding the equations of system (8) by parts, we find that $x=\frac{3}{4}$, i.e.

$AF:EF=3:1$.

3-basic ratio. Given a tetrahedron $ABCD$ and point M in the plane of its face ABC . Prove that the decomposition $\overline{DM} = \alpha \overline{DA} + \beta \overline{DB} + \gamma \overline{DC}$ satisfies the equality

$$\alpha + \beta + \gamma = 1$$

Evidence. Suppose that point M lies inside the triangle ABC (fig. 4). Draw a straight line through points A and M that intersects side BC at point E . Let point E divide side BC in the ratio $m:n$, i.e. $BE:EC=m:n$. Then by formula (5)

$$\overline{DE} = \frac{m}{m+n} \overline{DC} + \frac{n}{m+n} \overline{DB}$$

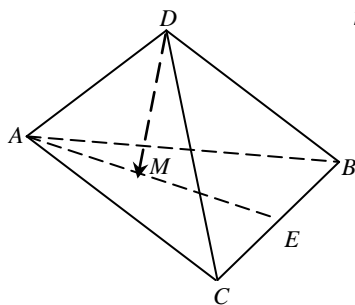


fig. 4

Let further point M divide segment AE in segment AE in the ratio $p:q$, i.e. $AM:ME=p:q$.

Then

$$\begin{aligned} \overline{DM} &= \frac{p}{p+q} \overline{DE} + \frac{q}{p+q} \overline{DA} = \\ &= \frac{p}{p+q} \left(\frac{m}{m+n} \overline{DC} + \frac{n}{m+n} \overline{DB} \right) + \frac{q}{p+q} \overline{DA} = \\ &= \frac{q}{p+q} \overline{DA} + \frac{p}{p+q} \cdot \frac{n}{m+n} \overline{DB} + \frac{p}{p+q} \cdot \frac{m}{m+n} \overline{DC} \end{aligned}$$

So, the vector \overline{DM} is decomposed into vectors \overline{DA} , \overline{DB} and \overline{DC} . It is easy to make sure that the sum of the coefficients in this decomposition is equal to 1.

I.e.

$$\frac{q}{p+q} + \frac{p}{p+q} \cdot \frac{n}{m+n} + \frac{p}{p+q} \cdot \frac{m}{m+n} = \frac{q}{p+q} + \frac{p}{p+q} \left(\frac{n}{m+n} + \frac{m}{m+n} \right) = \frac{q}{p+q} + \frac{p}{p+q} = 1$$

Remarks. 1) In those cases when the point M lies outside the triangle or on one of its sides, the proofs are similar. 2) The proved relation is a necessary and sufficient condition for $(A, B, C$ and $M)$ to the same plane.

When solving geometric problems using the vector method, it is necessary to move from the geometric formulation of the problem to its vector description. Then, using the properties of vectors and operations on them, find some vector relationships that reflect the data and conditions of the problem, from which it is possible to obtain a solution to the problem.

Given the lengths of three edges PA, PB and PC of the tetrahedron $PABC$, emanations from its vertex P , and the values of the plane angles at this vertex are also known, then using the vectors it is possible to find the radius, and therefore the area of the sphere (the volume of the sphere), described around this tetrahedron.

Consider the following tasks.

Task 3. In the triangular pyramid $PABC$, all planar angles at the vertex P are straight. Find the area of a sphere circumscribed about this pyramid if $PA = 2, PB = 3, PC = 4$.

Solution. Let point O be the center of a sphere circumscribed about a tetrahedron $PABC$, R is the radius of the this sphere. Then $OA = OB = OC = OP = R$.

We introduce non-coplanar vectors $\overrightarrow{PA} = \vec{a}, \overrightarrow{PB} = \vec{b}, \overrightarrow{PC} = \vec{c}$ we will take them as basic in space. Then $\overrightarrow{PO} = x\vec{a} + y\vec{b} + z\vec{c}$ and $|\overrightarrow{PO}| = R$. Find the coefficients x, y and z

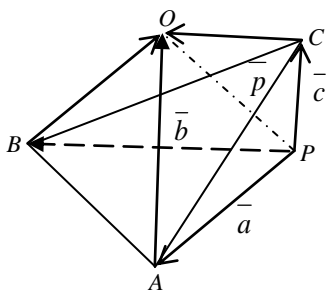


fig. 5

in this expansion of the vector \overrightarrow{PQ} .

According to the triangle rule, we have:

$$\vec{p} = \vec{a} + \overrightarrow{AO} = \vec{b} + \overrightarrow{BO} = \vec{c} + \overrightarrow{CO}, \text{ whence}$$

$$\overrightarrow{AO} = \vec{p} - \vec{a}, \overrightarrow{BO} = \vec{p} - \vec{b}, \overrightarrow{CO} = \vec{p} - \vec{c}.$$

From the equalities $OA = OB = OC = OP$ (as the radii of a sphere circumscribed about the $PABC$ tetrahedron) it

follows that $|\overrightarrow{PO}| = |\overrightarrow{AO}| = |\overrightarrow{BO}| = |\overrightarrow{CO}|$, means

$$\overrightarrow{AO}^2 = \overrightarrow{BO}^2 = \overrightarrow{CO}^2 = \overrightarrow{PO}^2 = \vec{p}^2$$

Then we get

$$\begin{cases} \vec{p}^2 - \overrightarrow{AO}^2 = 0 \\ \vec{p}^2 - \overrightarrow{BO}^2 = 0 \\ \vec{p}^2 - \overrightarrow{CO}^2 = 0 \end{cases} \Leftrightarrow \begin{cases} (\vec{p} - \overrightarrow{AO})(\vec{p} + \overrightarrow{AO}) = 0 \\ (\vec{p} - \overrightarrow{BO})(\vec{p} + \overrightarrow{BO}) = 0 \\ (\vec{p} - \overrightarrow{CO})(\vec{p} + \overrightarrow{CO}) = 0 \end{cases} \Leftrightarrow$$

$$\Leftrightarrow \begin{cases} (\vec{p} - (\vec{p} - \vec{a}))(\vec{p} + (\vec{p} - \vec{a})) = 0 \\ (\vec{p} - (\vec{p} - \vec{b}))(\vec{p} + (\vec{p} - \vec{b})) = 0 \\ (\vec{p} - (\vec{p} - \vec{c}))(\vec{p} + (\vec{p} - \vec{c})) = 0 \end{cases} \Leftrightarrow \begin{cases} \vec{a} \cdot (2\vec{p} - \vec{a}) = 0 \\ \vec{b} \cdot (2\vec{p} - \vec{b}) = 0 \\ \vec{c} \cdot (2\vec{p} - \vec{c}) = 0 \end{cases} \Leftrightarrow$$

$$\Leftrightarrow \begin{cases} \bar{a} \cdot \bar{p} = 0,5a^{-2} \\ \bar{b} \cdot \bar{p} = 0,5b^{-2} \\ \bar{c} \cdot \bar{p} = 0,5c^{-2} \end{cases}$$

Note that since the basic vectors $\bar{a}, \bar{b}, \bar{c}$ are pairwise perpendicular and their lengths are 2, 3 and 4, respectively, then

$$\bar{a} \cdot \bar{b} = \bar{a} \cdot \bar{c} = \bar{b} \cdot \bar{c} = 0, \quad \bar{a}^{-2} = 4, \quad \bar{b}^{-2} = 9, \quad \bar{c}^{-2} = 16 \quad (9)$$

Replacing P with the expression $x\bar{a} + y\bar{b} + z\bar{c}$ in the last system of equations and taking into account (9), we get:

$$\begin{cases} \bar{a}(x\bar{a} + y\bar{b} + z\bar{c}) = 0,5a^{-2} \\ \bar{b}(x\bar{a} + y\bar{b} + z\bar{c}) = 0,5b^{-2} \\ \bar{c}(x\bar{a} + y\bar{b} + z\bar{c}) = 0,5c^{-2} \end{cases} \Leftrightarrow \begin{cases} x\bar{a}^{-2} = 0,5\bar{a}^{-2} \\ y\bar{b}^{-2} = 0,5\bar{b}^{-2} \\ z\bar{c}^{-2} = 0,5\bar{c}^{-2} \end{cases} \Leftrightarrow \begin{cases} x = 0,5 \\ y = 0,5 \\ z = 0,5 \end{cases}$$

Then

$$\begin{aligned} \overline{PQ} &= 0,5\bar{a} + 0,5\bar{b} + 0,5\bar{c} \\ \overline{PQ}^2 &= 0,25\bar{a}^{-2} + 0,25\bar{b}^{-2} + 0,25\bar{c}^{-2} + \bar{a} \cdot \bar{b} + \bar{b} \cdot \bar{c} + \bar{a} \cdot \bar{c} = \\ &= 0,25(4+9+16) = \frac{29}{4}, \quad |\overline{PQ}| = \frac{\sqrt{29}}{2} \end{aligned}$$

$$\text{Means, } S_{\text{sphere}} = 4\pi R^2 = 4\pi \cdot \frac{29}{4} = 29\pi$$

The vector solution of many geometric problems is much simpler than their solution by means of elementary geometry, the reason for this simplification is that with the vector method of solving it is possible to do without those, additional constructions that should be performed in a purely geometric solution of even simple problems. Solving geometric problems, it is necessary to be able to translate the condition of a geometric problem into vector terminology and symbolism (into vector language), then perform the appropriate algebraic operations on vectors and, finally, translate the result obtained in vector form back into geometric language.

References:

1. Antonov N.S. Integrative function of training //Modern problems methods of teaching mathematics – M.: Education 1985, - P. 25-38
2. Arnold V.I. Math and mathematical education in the modern world //mathematics education – 1977 - №2. – p.109-112.
3. Babansky Y.K. Optimization of learning process – M.: 1977.
4. Vasilevsky A.B. Methods for solving problems. – M.: “High school” 1974. – 238 p.
5. Genkin G.Z. Geometric solutions of algebraic tasks// mathematics at school. -2001. №7. –p. 61-66.
6. Ginguls E.G. The development of mathematical abilities of students //mathematics at school. – 1990. -№1. – p. 14-17.
7. Gordina S.V. Methodological basis of the integration of mathematics education the diss. of the candidate ped. science. –saransk, 2002. – 169 p.

8. Dalinger V.A. Geometry helps algebra //mathematics at school. 1996. - №4. –p. 29-34.
9. Daniluk A.Y. The theory of the integration of education. Rostov: Publisher Rostov. Ped. -2000. – 440 p.
10. Dvoyakovsky P.G. About the geometric solution of algebraic tasks //mathematics at school, - 1980 – №30 – p. 33-35.
11. V.V.Prasolov. Using the area... //Quantum-1986. N6 p.16-19
12. Osanov A.A. The use of the principle of integration in the formation of a holistic view of the world //integration of education
13. Saranzev G.V. The methology of teaching methods mathematics. Saransk, 2001. – 144 p.
14. Kurlyanchik L., V.Senderov “Quantun” task // Kvant. -1992 -№9 –p 29-31.
- 15.Saipnazarov Sh.A., Gulamov A.// Analytic and graphical methods for the analysis of equations and their analysis. Physics, Mathematics and Informatics. -2016. -№3 –p/ 56-60.
- 16.Saipnazarov Sh.A., Yakubova.U., Dilbar Khodjabaeva// Improvement of economic knowledge of students when training mathematics. ACADEMICIA: An International Multidisciplinary Research Journal. 9, Sept 2020 316-323
- 17.Saipnazarov Sh.A., Dilbar Khodjabaeva// Various ways to solve problems at the extreme. INNOVATION I N SIIENCE, EDUCATION AND TEXHNOLOGU LONDON 2020
- 18.Saipnazarov Sh.A., Dilbar Khodjabaeva// APPLYING INEQUALITIES TO CALCULATING. ACADEMICIA:an international multidisciplinaru Research Jornal [https// saarj.com](https://saarj.com)